



BIOLOGY MIND

AQA


GCSE

BIOLOGY

4.1 | Cell Biology
QUESTION PAPER 1

Difficulty
EASY

Time allowed
59 minutes



Score

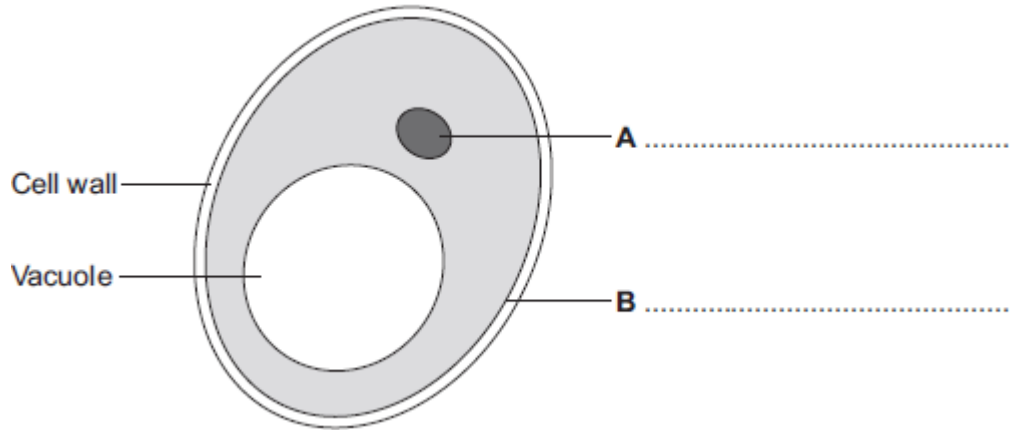
/59

Percentage

%

1 Human cells and yeast cells have some parts that are the same.

(a) The diagram shows a yeast cell.



Parts **A** and **B** are found in human cells and in yeast cells. On the diagram, label parts **A** and **B**.

(2)

(b) Many types of cell can divide to form new cells.

Some cells in human skin can divide to make new skin cells.

Why do human skin cells need to divide?

.....
.....

(1)

(c) Human stem cells can develop into many different types of human cell.

(i) Use the correct answer from the box to complete the sentence.

embryos	hair	nerve cells
---------	------	-------------

Human stem cells may come from

.....

(1)



- (ii) Use the correct answer from the box to complete the sentence.

cystic fibrosis	paralysis	polydactyly
------------------------	------------------	--------------------

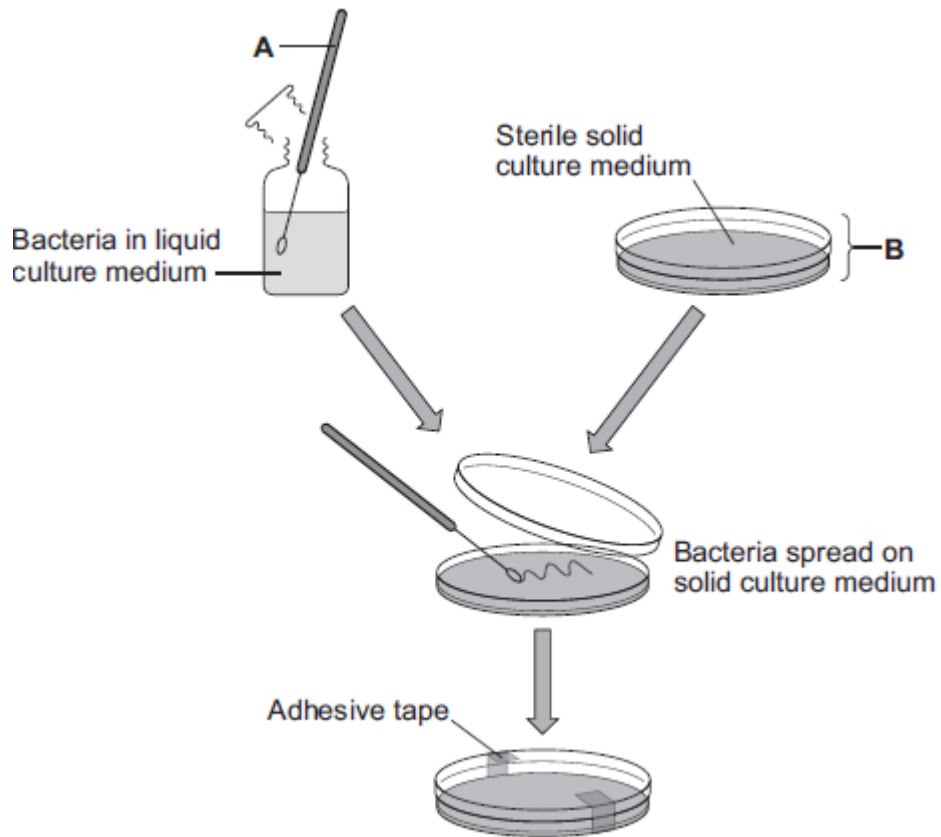
Human stem cells can be used to treat

.....

(1)
(Total 5 marks)



2 The diagram shows a method used to grow pure cultures of a bacterium.



(a) Name apparatus **A** and apparatus **B**.

Apparatus **A**

Apparatus **B**

(2)

(b) (i) Why should apparatus **A** and apparatus **B** be sterilised before they are used?

.....

(1)

(ii) How should apparatus **A** be sterilised?

Tick (✓) **one** box.

Using enzymes





Cell Structure | EASY

Using a flame

In an incubator

(1)

(iii) Adhesive tape is used to secure the lid on apparatus **B**.

Give **one** reason why the lid of apparatus **B** should be securely taped in place.

.....
.....

(1)

(c) What is the maximum temperature that should be used **in schools** to grow the bacteria in apparatus **B**?

Draw a ring around the correct answer.

10 °C

25 °C

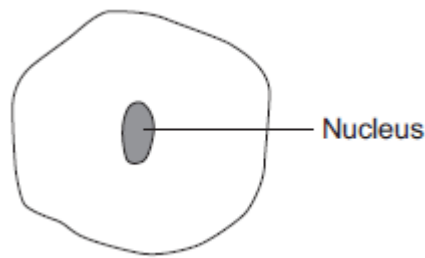
50 °C

(1)

(Total 6 marks)



3 The diagram below shows a cell.



(a) Draw a ring around the correct answer to complete each sentence.

(i) In the nucleus of a cell, genes are part of

chromosomes.
membranes.
receptors.

(1)

(ii) Different genes control different

characteristics
gametes
nuclei

of an organism.

(1)

(iii) Studying the similarities and differences between organisms allows us to

classify
clone
grow

the organisms.

(1)



(b) Complete the following sentence.

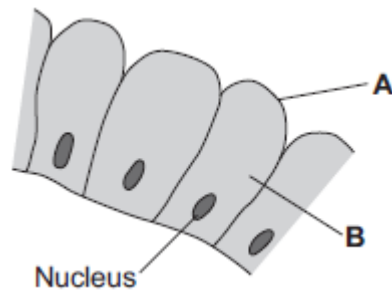
Living things can be grouped into animals, microorganisms and

(1)

(Total 4 marks)



4 The image below shows some cells in the lining of the stomach.



(a) (i) Use words from the box to name structures **A** and **B**.

cell membrane	chloroplast	cytoplasm	vacuole
---------------	-------------	-----------	---------

A

B

(2)

(ii) What is the function of the nucleus?

Tick (✓) **one** box.

To control the activities of the cell

To control movement of substances into and out of the cell

To release energy in respiration

(1)

(b) Draw **one** line from each part of the human body to its correct scientific name.





Cell Structure | EASY

Part of human body

Layer of cells lining the stomach

Stomach

Mouth, stomach, intestines, liver and pancreas

Scientific name

An organ

An organism

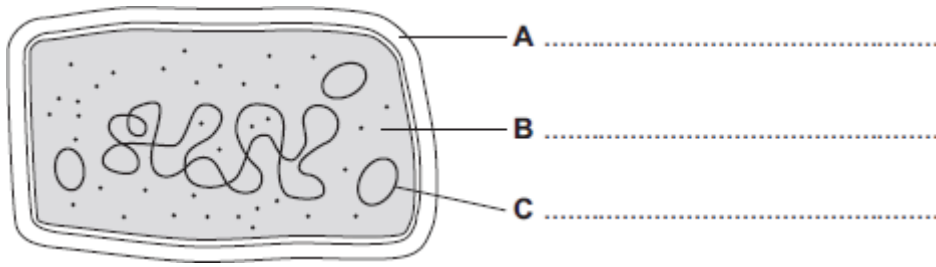
An organ system

A tissue

(3)
(Total 6 marks)



5 (a) The diagram shows the structure of a bacterial cell.



(i) On the diagram use words from the box to label structures **A**, **B** and **C**.

cell membrane	cell wall	chloroplast	cytoplasm	plasmid
---------------	-----------	-------------	-----------	---------

(3)

(ii) Give **one** difference between the structure of the bacterial cell and an animal cell.

.....

(1)

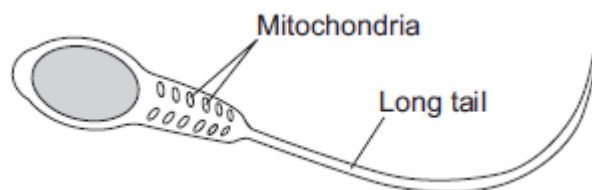
(iii) Name **one** structure that is found in a plant cell but is **not** found in a bacterial or an animal cell.

.....

(1)

(b) Cells can be specialised for a particular job.

The diagram shows the structure of a human sperm cell.





Cell Structure | EASY

Describe how the long tail and the mitochondria help the sperm to do its job.

Long tail.....
.....
.....

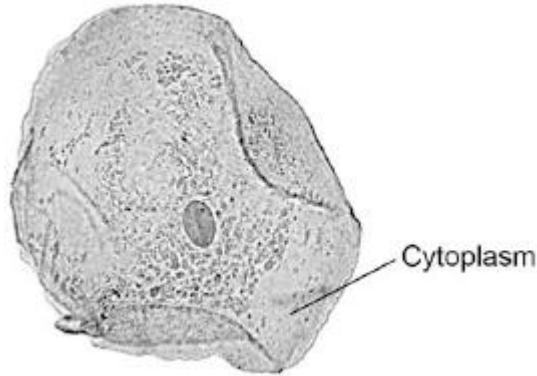
Mitochondria.....
.....
.....

(4)
(Total 9 marks)



6 **Figure 1** shows a human cheek cell viewed under a light microscope.

Figure 1



© Ed Reschke/Photolibrary/Getty Images

(a) Label the nucleus **and** cell membrane on **Figure 1**.

(2)

(b) Cheek cells are a type of body cell.

Body cells grow through cell division.

What is the name of this type of cell division?

Tick **one** box.

Differentiation

Mitosis

Specialisation

(1)

(c) Ribosomes and mitochondria are **not** shown in **Figure 1**.

What type of microscope is needed to see ribosomes and mitochondria?

.....

(1)

(d) What is the advantage of using the type of microscope you named in part (c)?



Tick **one** box.

Cheaper

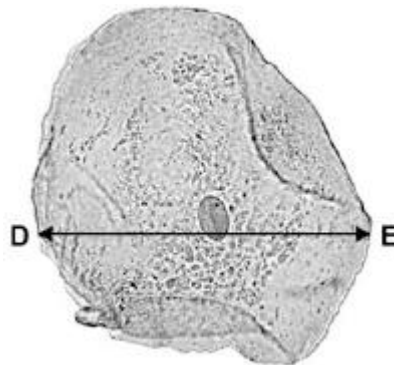
Higher magnification

Lower resolution

(1)

- (e) The cheek cell in **Figure 2** is magnified 250 times.
The width of the cell is shown by the line **D** to **E**.

Figure 2



Calculate the width of the cheek cell in micrometres (μm).

Complete the following steps.

Measure the width of the cell using a ruler mm

Use the equation to work out the real width of the cell in mm:

$$\text{real size} = \frac{\text{image size}}{\text{magnification}} \quad \dots\dots\dots \text{mm}$$

Convert mm to μm μm

(3)

- (f) A red blood cell is $8 \mu\text{m}$ diameter.
A bacterial cell is 40 times smaller.



Calculate the diameter of the bacterial cell.

Tick **one** box.

0.02 μm

0.2 μm

2.0 μm

20.0 μm

(1)
(Total 9 marks)

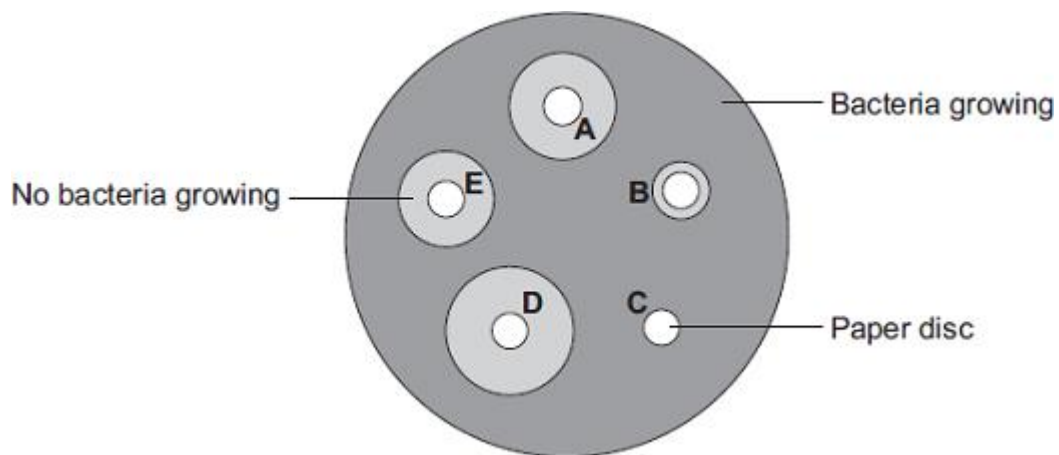


- 7 Students in a school investigated the effect of five different antibiotics, **A**, **B**, **C**, **D** and **E**, on one type of bacterium.

The students:

- grew the bacteria on agar jelly in a Petri dish
- soaked separate paper discs in each of the antibiotics
- put the paper discs onto the bacteria in the Petri dish
- put the Petri dish into an incubator.

The diagram shows what the Petri dish looked like after 3 days.



- (a) (i) What is the maximum temperature the incubator should be set at in the school?

Draw a ring around your answer.

10°C 25°C 50°C

(1)

- (ii) Draw a ring around the correct answer to complete the sentence.

The incubator should **not** be set at a higher temperature because the higher

temperature might help the growth of

pathogens.

toxins.

viruses.

(1)



- (b) Which antibiotic, **A**, **B**, **C**, **D** or **E**, would be best to treat a disease caused by this type of bacterium?

Write your answer in the box.

Give the reason for your answer.

.....
.....

(2)

- (c) Antibiotics **cannot** be used to treat diseases caused by viruses.

Why?

Tick (✓) **one** box.

Viruses are not pathogens

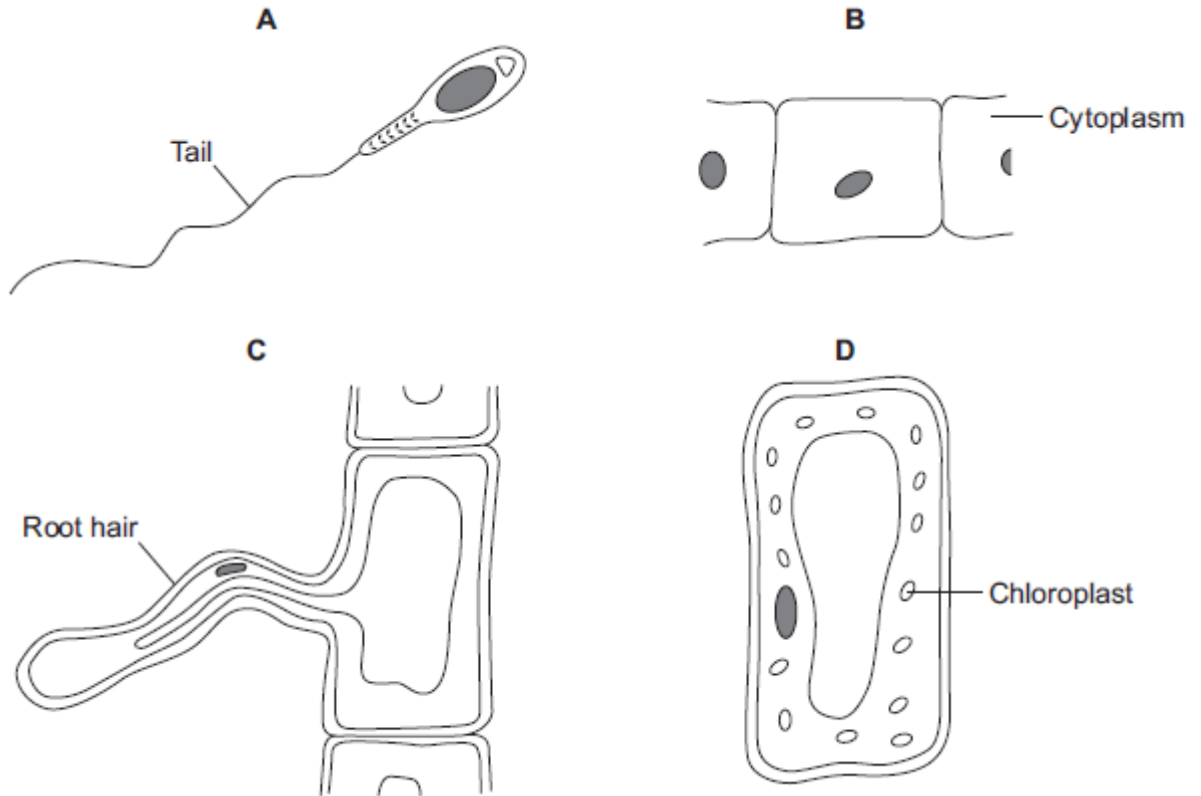
There are too many different types of virus

Viruses live inside cells

(1)
(Total 5 marks)



- 8 The diagrams show four types of cell, **A**, **B**, **C** and **D**.
Two of the cells are plant cells and two are animal cells.



- (a) (i) Which **two** of the cells are plant cells?

Tick (✓) **one** box.

A and B

A and D

C and D

(1)

- (ii) Give **one** reason for your answer.

.....
.....

(1)





Cell Structure | EASY

(b) (i) Which cell, **A**, **B**, **C** or **D**, is adapted for swimming?

(1)

(ii) Which cell, **A**, **B**, **C** or **D**, can produce glucose by photosynthesis?

(1)

(c) Cells **A**, **B**, **C** and **D** all use oxygen.

For what process do cells use oxygen?

Draw a ring around **one** answer.

osmosis

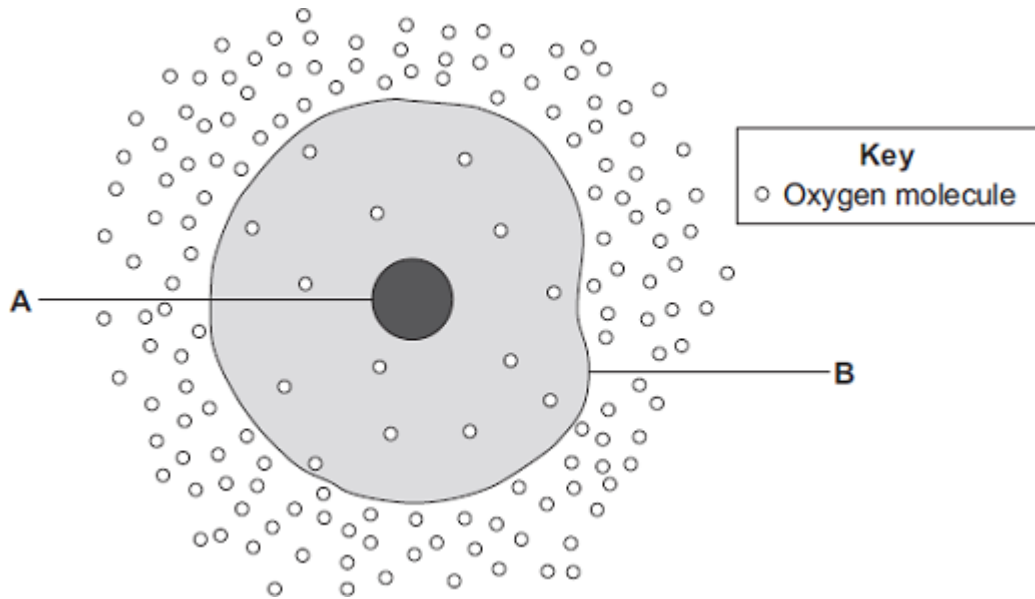
photosynthesis

respiration

(1)
(Total 5 marks)



9 The diagram shows a cell.



(a) (i) Use words from the box to name the structures labelled **A** and **B** .

cell membrane	chloroplast	cytoplasm	nucleus
---------------	-------------	-----------	---------

A

B

(2)

(ii) The cell in the diagram is an animal cell.

How can you tell it is an animal cell and **not** a plant cell?

Give **two** reasons.

1

.....

2

.....

(2)

(b) Oxygen will diffuse into the cell in the diagram.





Why?

Use information from the diagram.

.....
.....

(1)

(c) The cell shown in the diagram is usually found with similar cells.

Draw a ring around the correct answer to complete the sentence.

Scientists call a group of similar cells

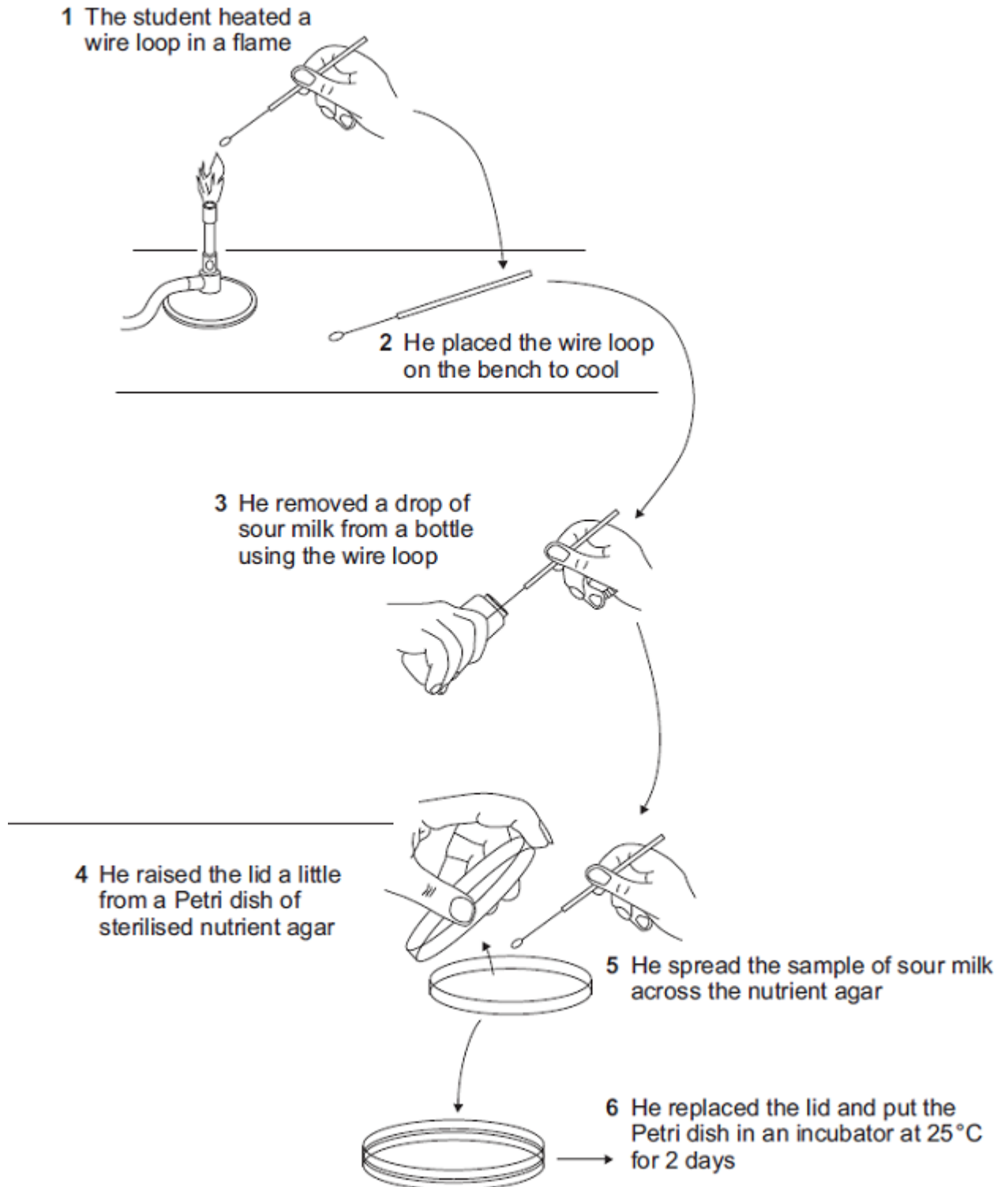
- an organ.
- a system.
- a tissue.

(1)
(Total 6 marks)





- 10 The diagram shows how a student transferred some sour milk from a bottle to a Petri dish of nutrient agar.



List A gives four actions carried out by the student.
List B gives five possible effects of these actions.





Cell Structure | EASY

Draw a straight line from each action in **List A** to its effect in **List B**.
Draw only **one** line from each action.

List A – Action

Heating loop in flame

Placing loop on bench to cool

Only lifting lid of Petri dish a little

Placing Petri dish in incubator at 25°C

List B – Effect

Risk of contamination with bacteria increased

Fewer bacteria will enter

Kills bacteria

Prevents air entering

Risk of growth of pathogens decreased

(Total 4 marks)

