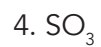
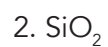
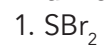


# Lewis Structures Homework

Draw the Lewis structure for each of the following covalent molecules.



5.  $\text{PBr}_3$

6.  $\text{OCl}_2$

7.  $\text{H}_2\text{O}$

8.  $\text{HCl}$