

Please write clearly in block capitals.

Centre number

Candidate number

Surname \_\_\_\_\_

Forename(s) \_\_\_\_\_

Candidate signature \_\_\_\_\_

# A-level MATHEMATICS

## Paper 2

Wednesday 12 June 2019

Morning

Time allowed: 2 hours

### Materials

- You must have the AQA Formulae for A-level Mathematics booklet.
- You should have a graphical or scientific calculator that meets the requirements of the specification.

### Instructions

- Use black ink or black ball-point pen. Pencil should only be used for drawing.
- Fill in the boxes at the top of this page.
- Answer **all** questions.
- You must answer each question in the space provided for that question. If you require extra space, use an AQA supplementary answer book; do **not** use the space provided for a different question.
- Show all necessary working; otherwise marks for method may be lost.
- Do all rough work in this book. Cross through any work that you do not want to be marked.

### Information

- The marks for questions are shown in brackets.
- The maximum mark for this paper is 100.

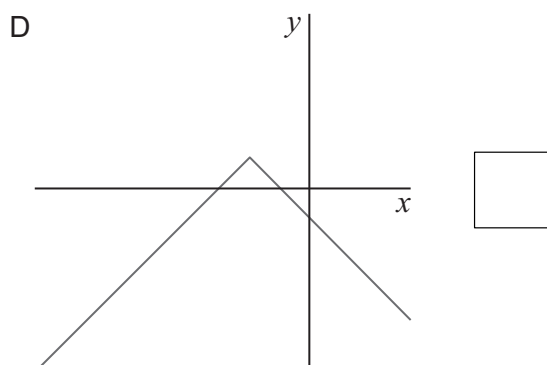
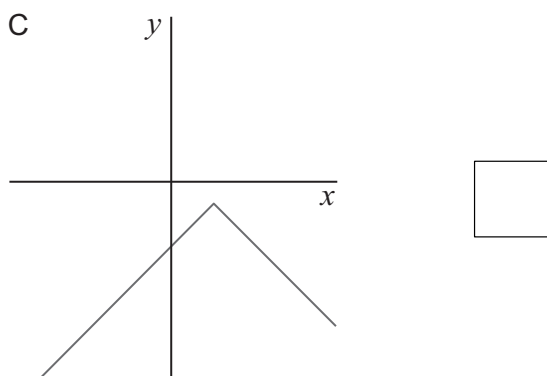
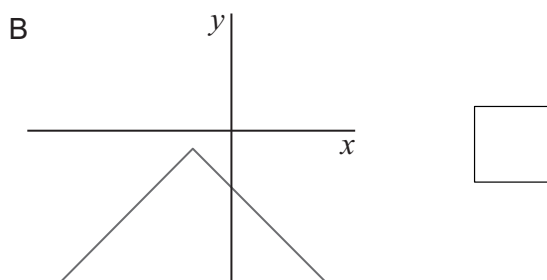
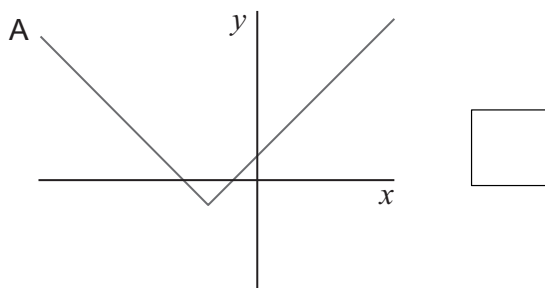
### Advice

- Unless stated otherwise, you may quote formulae, without proof, from the booklet.
- You do not necessarily need to use all the space provided.

For Examiner's Use	
Question	Mark
1	
2	
3	
4	
5	
6	
7	
8	
9	
10	
11	
12	
13	
14	
15	
16	
17	
<b>TOTAL</b>	



## Section A

Answer **all** questions in the spaces provided.1 Identify the graph of  $y = 1 - |x + 2|$  from the options below.Tick (✓) **one** box.**[1 mark]**

2 Simplify  $\sqrt{a^{\frac{2}{3}} \times a^{\frac{2}{5}}}$

Circle your answer.

[1 mark]

$$a^{\frac{2}{15}}$$

$$a^{\frac{4}{15}}$$

$$a^{\frac{8}{15}}$$

$$a^{\frac{16}{15}}$$

3 Each of these functions has domain  $x \in \mathbb{R}$

Which function does **not** have an inverse?

Circle your answer.

[1 mark]

$$f(x) = x^3$$

$$f(x) = 2x + 1$$

$$f(x) = x^2$$

$$f(x) = e^x$$

Turn over for the next question

Turn over ►







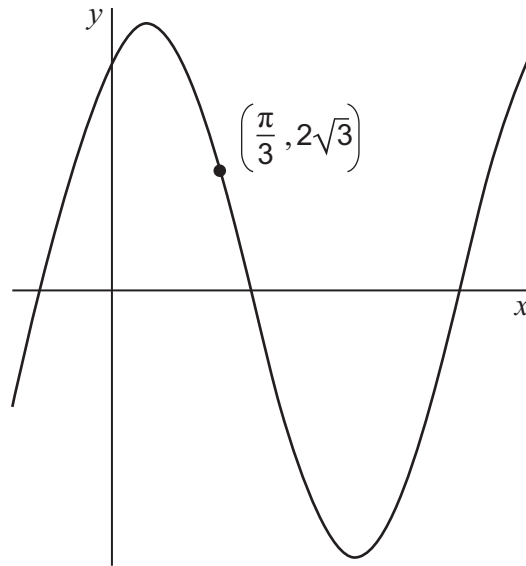
6

A curve has equation

$$y = a \sin x + b \cos x$$

where  $a$  and  $b$  are constants.

The maximum value of  $y$  is 4 and the curve passes through the point  $(\frac{\pi}{3}, 2\sqrt{3})$  as shown in the diagram.

Find the exact values of  $a$  and  $b$ .**[6 marks]**


---



---



---



---



---



---



---



---



---



---



---



---



---



---



---



---



*Do not write  
outside the  
box*

---

---

---

---

---

---

---

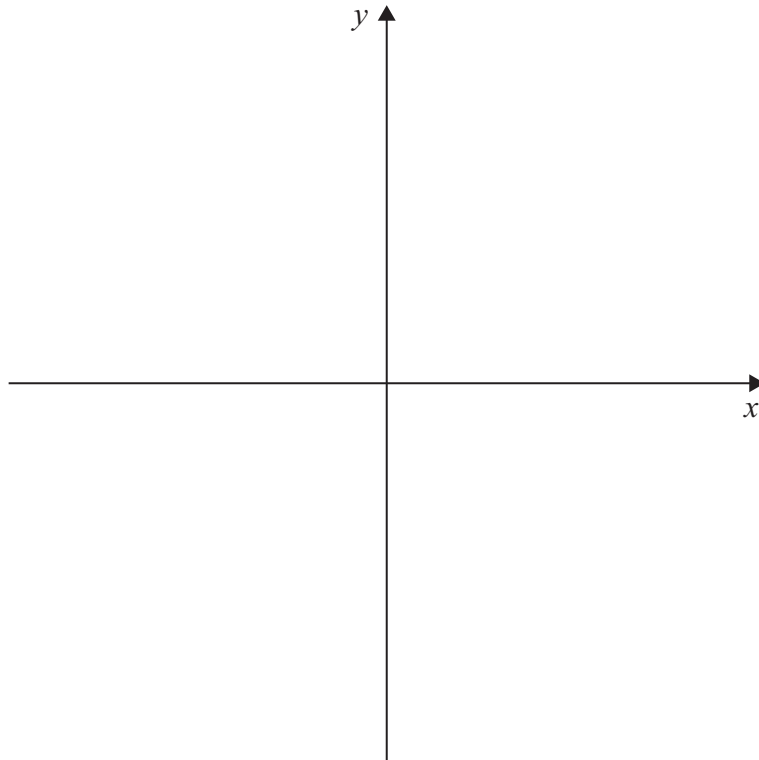
**Turn over for the next question**

**Turn over ►**



- 7 (a)** Sketch the graph of any cubic function that has **both** three distinct real roots **and** a positive coefficient of  $x^3$

[2 marks]



- 7 (b)** The function  $f(x)$  is defined by

$$f(x) = x^3 + 3px^2 + q$$

where  $p$  and  $q$  are constants and  $p > 0$

- 7 (b) (i)** Show that there is a turning point where the curve crosses the  $y$ -axis.

[3 marks]

---



---



---



---



---



---



---



---



---



---







**8** Theresa bought a house on 2 January 1970 for £8000.

The house was valued by a local estate agent on the same date every 10 years up to 2010.

The valuations are shown in the following table.

<b>Year</b>	1970	1980	1990	2000	2010
<b>Valuation price</b>	£8 000	£19 000	£36 000	£82 000	£205 000

The valuation price of the house can be modelled by the equation

$$V = pq^t$$

where  $V$  pounds is the valuation price  $t$  years after 2 January 1970 and  $p$  and  $q$  are constants.

**8 (a)** Show that  $V = pq^t$  can be written as  $\log_{10} V = \log_{10} p + t \log_{10} q$

**[2 marks]**

---



---



---



---



---



---

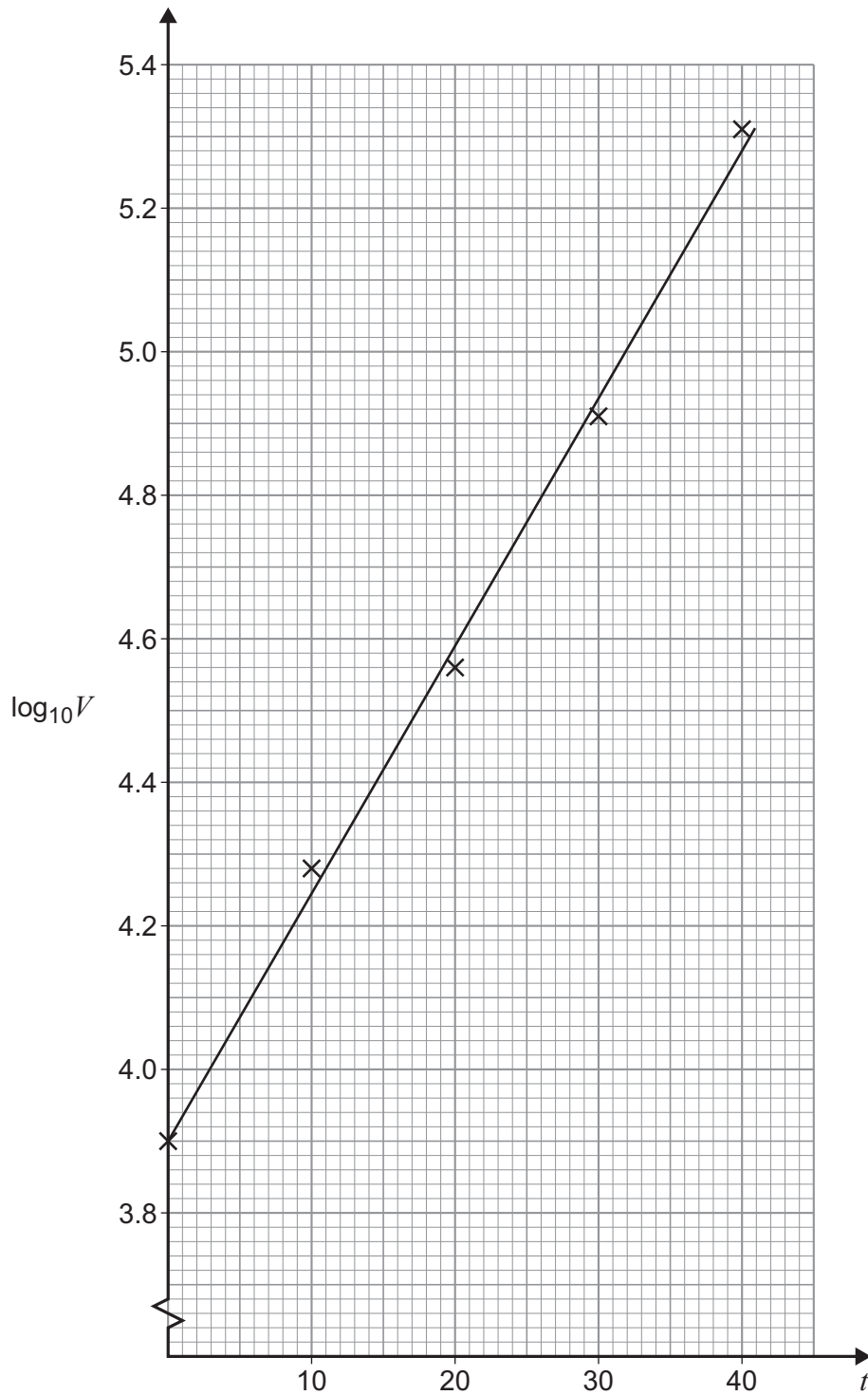


---



- 8 (b)** The values in the table of  $\log_{10} V$  against  $t$  have been plotted and a line of best fit has been drawn on the graph below.

$t$	0	10	20	30	40
$\log_{10} V$	3.90	4.28	4.56	4.91	5.31



Question 8 continues on the next page

Turn over ►





**8 (c)** Determine the year in which Theresa's house will first be worth half a million pounds. **[3 marks]**

---

---

---

---

---

---

---

---

---

---

**8 (d)** Explain whether your answer to part (c) is likely to be reliable. **[2 marks]**

---

---

---

---

---

---

**Turn over for the next question**

**Turn over ►**



**9 (a)** Show that the first two terms of the binomial expansion of  $\sqrt{4 - 2x^2}$  are

$$2 - \frac{x^2}{2}$$

**[2 marks]**

---

---

---

---

---

---

---

**9 (b)** State the range of values of  $x$  for which the expansion found in part (a) is valid.

**[2 marks]**

---

---

---

---

---

---

---



**9 (c)** Hence, find an approximation for

$$\int_0^{0.4} \sqrt{\cos x} \, dx$$

giving your answer to five decimal places.

Fully justify your answer.

**[4 marks]**

---

---

---

---

---

---

---

---

---

---

---

---

---

---

---

---

---

---

---

---

---

---

---

---

**9 (d)** A student decides to use this method to find an approximation for

$$\int_0^{1.4} \sqrt{\cos x} \, dx$$

Explain why this may not be a suitable method.

**[1 mark]**

---

---

---

**Turn over for Section B**

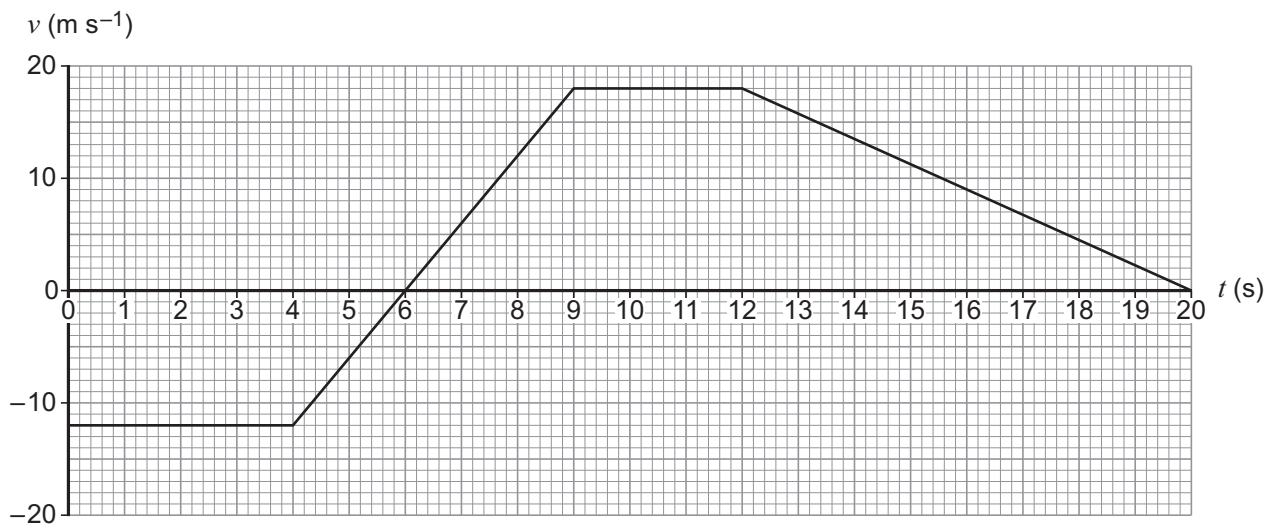
**Turn over ►**



## Section B

Answer **all** questions in the spaces provided.

- 10** The diagram below shows a velocity-time graph for a particle moving with velocity  $v \text{ m s}^{-1}$  at time  $t$  seconds.



Which statement is correct?

Tick (✓) **one** box.

[1 mark]

The particle was stationary for  $9 \leq t \leq 12$

The particle was decelerating for  $12 \leq t \leq 20$

The particle had a displacement of zero when  $t = 6$

The particle's speed when  $t = 4$  was  $-12 \text{ m s}^{-1}$





- 11** A wooden crate rests on a rough horizontal surface.
- The coefficient of friction between the crate and the surface is 0.6
- A forward force acts on the crate, parallel to the surface.
- When this force is 600 N, the crate is on the point of moving.
- Find the weight of the crate.
- Circle your answer.

**[1 mark]**

1000 N

100 kg

360 N

36 kg

- 12** A particle, under the action of two constant forces, is moving across a perfectly smooth horizontal surface at a constant speed of  $10 \text{ m s}^{-1}$
- The first force acting on the particle is  $(400\mathbf{i} + 180\mathbf{j}) \text{ N}$ .
- The second force acting on the particle is  $(p\mathbf{i} - 180\mathbf{j}) \text{ N}$ .
- Find the value of  $p$ .
- Circle your answer.

**[1 mark]**

-400

-390

390

400

**Turn over for the next question****Turn over ►**

**13** In a school experiment, a particle, of mass  $m$  kilograms, is released from rest at a point  $h$  metres above the ground.

At the instant it reaches the ground, the particle has velocity  $v \text{ m s}^{-1}$

**13 (a)** Show that

$$v = \sqrt{2gh}$$

**[2 marks]**

---

---

---

---

---

---

---

**13 (b)** A student correctly used  $h = 18$  and measured  $v$  as 20

The student's teacher claims that the machine measuring the velocity must have been faulty.

Determine if the teacher's claim is correct.

Fully justify your answer.

**[3 marks]**

---

---

---

---

---

---

---

---

---

---



**Turn over for the next question**

*Do not write  
outside the  
box*

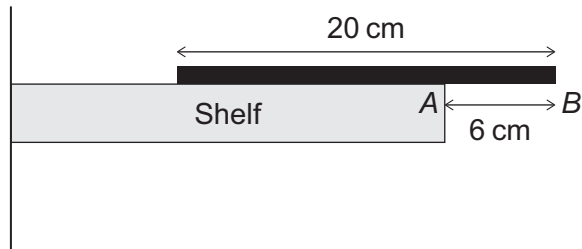
**DO NOT WRITE ON THIS PAGE  
ANSWER IN THE SPACES PROVIDED**

**Turn over ►**



**14** A metal rod, of mass  $m$  kilograms and length 20 cm, lies at rest on a horizontal shelf.

The end of the rod,  $B$ , extends 6 cm beyond the edge of the shelf,  $A$ , as shown in the diagram below.



**14 (a)** The rod is in equilibrium when an object of mass 0.28 kilograms hangs from the midpoint of  $AB$ .

Show that  $m = 0.21$

**[3 marks]**

---



---



---



---



---



---



---



---



---



---















**16 (c)** The athlete's actual time for this race is 9.8 seconds.

Comment on the accuracy of the model.

**[2 marks]**

---

---

---

---

---

---

---



**Turn over for the next question**

*Do not write  
outside the  
box*

**DO NOT WRITE ON THIS PAGE  
ANSWER IN THE SPACES PROVIDED**

**Turn over ►**




17 Lizzie is sat securely on a wooden sledge.

The combined mass of Lizzie and the sledge is  $M$  kilograms.

The sledge is being pulled forward in a straight line along a horizontal surface by means of a light inextensible rope, which is attached to the front of the sledge.

This rope stays inclined at an acute angle  $\theta$  above the horizontal and remains taut as the sledge moves forward.



The sledge remains in contact with the surface throughout.

The coefficient of friction between the sledge and the surface is  $\mu$  and there are no other resistance forces.

Lizzie and the sledge move forward with constant acceleration,  $a \text{ m s}^{-2}$

The tension in the rope is a constant  $T$  Newtons.

17 (a) Show that

$$T = \frac{M(a + \mu g)}{\cos \theta + \mu \sin \theta}$$

[7 marks]

---



---



---



---



---



---



---



---



---



---



---



---



---



---



---



---





**There are no questions printed on this page**

*Do not write  
outside the  
box*

**DO NOT WRITE ON THIS PAGE  
ANSWER IN THE SPACES PROVIDED**



**There are no questions printed on this page**

*Do not write  
outside the  
box*

**DO NOT WRITE ON THIS PAGE  
ANSWER IN THE SPACES PROVIDED**



**There are no questions printed on this page**

*Do not write  
outside the  
box*

**DO NOT WRITE ON THIS PAGE  
ANSWER IN THE SPACES PROVIDED**

**Copyright information**

For confidentiality purposes, from the November 2015 examination series, acknowledgements of third-party copyright material are published in a separate booklet rather than including them on the examination paper or support materials. This booklet is published after each examination series and is available for free download from [www.aqa.org.uk](http://www.aqa.org.uk) after the live examination series.

Permission to reproduce all copyright material has been applied for. In some cases, efforts to contact copyright-holders may have been unsuccessful and AQA will be happy to rectify any omissions of acknowledgements. If you have any queries please contact the Copyright Team, AQA, Stag Hill House, Guildford, GU2 7XJ.

Copyright © 2019 AQA and its licensors. All rights reserved.



3 2

Jun19/7357/2



1 9 6 A 7 3 5 7 / 2