

Please write clearly in block capitals.

Centre number

--	--	--	--	--

Candidate number

--	--	--	--

Surname

---

Forename(s)

---

Candidate signature

---

# A-level MATHEMATICS

## Paper 1

Wednesday 6 June 2018

Morning

Time allowed: 2 hours

### Materials

- You must have the AQA Formulae for A-level Mathematics booklet.
- You should have a graphical or scientific calculator that meets the requirements of the specification.

### Instructions

- Use black ink or black ball-point pen. Pencil should only be used for drawing.
- Fill in the boxes at the top of this page.
- Answer **all** questions.
- You must answer each question in the space provided for that question. If you require extra space, use an AQA supplementary answer book; do **not** use the space provided for a different question.
- Show all necessary working; otherwise marks for method may be lost.
- Do all rough work in this book. Cross through any work that you do not want to be marked.

### Information

- The marks for questions are shown in brackets.
- The maximum mark for this paper is 100.

### Advice

- Unless stated otherwise, you may quote formulae, without proof, from the booklet.
- You do not necessarily need to use all the space provided.

For Examiner's Use	
Question	Mark
1	
2	
3	
4	
5	
6	
7	
8	
9	
10	
11	
12	
13	
14	
15	
<b>TOTAL</b>	



Answer **all** questions in the spaces provided.

**1**

$$y = \frac{1}{x^2}$$

Find an expression for  $\frac{dy}{dx}$

Circle your answer.

**[1 mark]**

$$\frac{dy}{dx} = \frac{0}{2x}$$

$$\frac{dy}{dx} = x^{-2}$$

$$\frac{dy}{dx} = -\frac{2}{x}$$

$$\frac{dy}{dx} = -\frac{2}{x^3}$$

**2**

The graph of  $y = 5^x$  is transformed by a stretch in the  $y$ -direction, scale factor 5

State the equation of the transformed graph.

Circle your answer.

**[1 mark]**

$$y = 5 \times 5^x$$

$$y = 5^{\frac{x}{5}}$$

$$y = \frac{1}{5} \times 5^x$$

$$y = 5^{5x}$$



3 A periodic sequence is defined by  $U_n = \sin\left(\frac{n\pi}{2}\right)$

State the period of this sequence.

Circle your answer.

[1 mark]

8

$2\pi$

4

$\pi$

4 The function  $f$  is defined by  $f(x) = e^{x-4}$ ,  $x \in \mathbb{R}$

Find  $f^{-1}(x)$  and state its domain.

[3 marks]

---

---

---

---

---

---

---

---

---

---

Turn over for the next question

Turn over ►



**5** A curve is defined by the parametric equations

$$x = 4 \times 2^{-t} + 3$$

$$y = 3 \times 2^t - 5$$

**5 (a)** Show that  $\frac{dy}{dx} = -\frac{3}{4} \times 2^{2t}$

**[3 marks]**

---

---

---

---

---

---

---

---

---

---

**5 (b)** Find the Cartesian equation of the curve in the form  $xy + ax + by = c$ , where  $a$ ,  $b$  and  $c$  are integers.

**[3 marks]**

---

---

---

---

---

---

---

---

---

---



- 6 (a)** Find the first three terms, in ascending powers of  $x$ , of the binomial expansion of  $\frac{1}{\sqrt{4+x}}$

[3 marks]

---

---

---

---

---

---

---

---

---

---

- 6 (b)** Hence, find the first three terms of the binomial expansion of  $\frac{1}{\sqrt{4-x^3}}$

[2 marks]

---

---

---

---

---

---

---

Question 6 continues on the next page

Turn over ►



- 6 (c)** Using your answer to part **(b)**, find an approximation for  $\int_0^1 \frac{1}{\sqrt{4-x^3}} dx$ , giving your answer to seven decimal places.

**[3 marks]**

---

---

---

---

---

---

---

---

---

---

- 6 (d) (i)** Edward, a student, decides to use this method to find a more accurate value for the integral by increasing the number of terms of the binomial expansion used.

Explain clearly whether Edward's approximation will be an overestimate, an underestimate, or if it is impossible to tell.

**[2 marks]**

---

---

---

---

---

---

---



**6 (d) (ii)** Edward goes on to use the expansion from part **(b)** to find an approximation

for  $\int_{-2}^0 \frac{1}{\sqrt{4-x^3}} dx$

Explain why Edward's approximation is invalid.

**[2 marks]**

---

---

---

---

---

---

---

**Turn over for the next question**

**Turn over ►**



**7** Three points  $A$ ,  $B$  and  $C$  have coordinates  $A(8, 17)$ ,  $B(15, 10)$  and  $C(-2, -7)$

**7 (a)** Show that angle  $ABC$  is a right angle.

**[3 marks]**

---

---

---

---

---

---

---

---

---

---

**7 (b)**  $A$ ,  $B$  and  $C$  lie on a circle.

**7 (b) (i)** Explain why  $AC$  is a diameter of the circle.

**[1 mark]**

---

---

---





*Do not write  
outside the  
box*

**7 (b) (ii)** Determine whether the point  $D (-8, -2)$  lies inside the circle, on the circle or outside the circle.

Fully justify your answer.

**[4 marks]**

---

---

---

---

---

---

---

---

---

---

---

---

---

---

---

---

**Turn over for the next question**

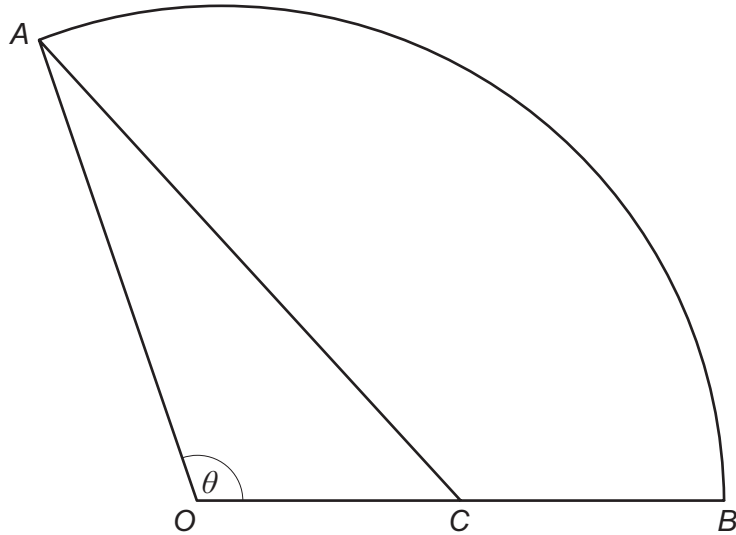
**Turn over ►**



**8** The diagram shows a sector of a circle  $OAB$ .

$C$  is the midpoint of  $OB$ .

Angle  $AOB$  is  $\theta$  radians.



**8 (a)** Given that the area of the triangle  $OAC$  is equal to one quarter of the area of the sector  $OAB$ , show that  $\theta = 2 \sin \theta$

**[4 marks]**

---



---



---



---



---



---



---



---



---



---



---



---



---



---



---



---



- 8 (b)** Use the Newton-Raphson method with  $\theta_1 = \pi$ , to find  $\theta_3$  as an approximation for  $\theta$ .  
Give your answer correct to five decimal places.

**[3 marks]**

---

---

---

---

---

---

---

---

---

---

- 8 (c)** Given that  $\theta = 1.89549$  to five decimal places, find an estimate for the percentage error in the approximation found in part **(b)**.

**[1 mark]**

---

---

---

**Turn over for the next question**

**Turn over ►**



**9** An arithmetic sequence has first term  $a$  and common difference  $d$ .

The sum of the first 36 terms of the sequence is equal to the square of the sum of the first 6 terms.

**9 (a)** Show that  $4a + 70d = 4a^2 + 20ad + 25d^2$

[4 marks]

---

---

---

---

---

---

---

---

---

---

---

---

---

---

---

---

---

---

---

---

---

---

---

---

---

---

---

---

---

---



**9 (b)** Given that the sixth term of the sequence is 25, find the smallest possible value of  $a$ .  
**[5 marks]**

---

---

---

---

---

---

---

---

---

---

---

---

---

---

---

---

---

---

---

---

---

---

Turn over for the next question

Turn over ►



- 10** A scientist is researching the effects of caffeine. She models the mass of caffeine in the body using

$$m = m_0 e^{-kt}$$

where  $m_0$  milligrams is the initial mass of caffeine in the body and  $m$  milligrams is the mass of caffeine in the body after  $t$  hours.

On average, it takes 5.7 hours for the mass of caffeine in the body to halve.

One cup of strong coffee contains 200 mg of caffeine.

- 10 (a)** The scientist drinks two strong cups of coffee at 8 am. Use the model to estimate the mass of caffeine in the scientist's body at midday.

**[4 marks]**

---

---

---

---

---

---

---

---

---

---

---

---

---

---

---

---

---

---

---

---

---

---

---



**10 (b)** The scientist wants the mass of caffeine in her body to stay below 480 mg  
Use the model to find the earliest time that she could drink another cup of strong coffee.

Give your answer to the nearest minute.

**[3 marks]**

---

---

---

---

---

---

---

---

---

---

**10 (c)** State a reason why the mass of caffeine remaining in the scientist's body predicted by the model may not be accurate.

**[1 mark]**

---

---

---

**Turn over for the next question**

**Turn over ►**



- 11** The daily world production of oil can be modelled using

$$V = 10 + 100\left(\frac{t}{30}\right)^3 - 50\left(\frac{t}{30}\right)^4$$

where  $V$  is volume of oil in millions of barrels, and  $t$  is time in years since 1 January 1980.

- 11 (a) (i)** The model is used to predict the time,  $T$ , when oil production will fall to zero.

Show that  $T$  satisfies the equation

$$T = \sqrt[3]{60T^2 + \frac{162\,000}{T}}$$

[3 marks]

---

---

---

---

---

---

---

---

---

---

---

---

- 11 (a) (ii)** Use the iterative formula  $T_{n+1} = \sqrt[3]{60T_n^2 + \frac{162\,000}{T_n}}$ , with  $T_0 = 38$ , to find the values of  $T_1$ ,  $T_2$ , and  $T_3$ , giving your answers to three decimal places.

[2 marks]

---

---

---

---

---

---

---

---





**11 (a) (iii)** Explain the relevance of using  $T_0 = 38$

**[1 mark]**

---

---

---

**11 (b)** From 1 January 1980 the daily use of oil by one technologically developing country can be modelled as

$$V = 4.5 \times 1.063^t$$

Use the models to show that the country's use of oil and the world production of oil will be equal during the year 2029.

**[4 marks]**

---

---

---

---

---

---

---

---

---

---

---

---

---

---

---

---

**Turn over for the next question**

**Turn over ►**



**12**  $p(x) = 30x^3 - 7x^2 - 7x + 2$

**12 (a)** Prove that  $(2x + 1)$  is a factor of  $p(x)$

**[2 marks]**

---

---

---

---

---

---

---

**12 (b)** Factorise  $p(x)$  completely.

**[3 marks]**

---

---

---

---

---

---

---

---

---

---



**12 (c)** Prove that there are no real solutions to the equation

$$\frac{30 \sec^2 x + 2 \cos x}{7} = \sec x + 1$$

**[5 marks]**

---

---

---

---

---

---

---

---

---

---

---

---

---

---

---

---

---

---

---

---

---

---

---

---

---

**Turn over for the next question**

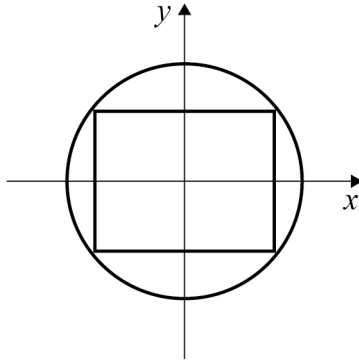
**Turn over ▶**



13

A company is designing a logo. The logo is a circle of radius 4 inches with an inscribed rectangle. The rectangle must be as large as possible.

The company models the logo on an  $x$ - $y$  plane as shown in the diagram.



Use calculus to find the maximum area of the rectangle.

Fully justify your answer.

[10 marks]

---

---

---

---

---

---

---

---

---

---

---

---

---

---

---

---

---

---

---

---

---

---

---

---



Do not write outside the box

---

---

---

---

---

---

---

---

---

---

---

---

---

---

---

---

---

---

---

Turn over for the next question

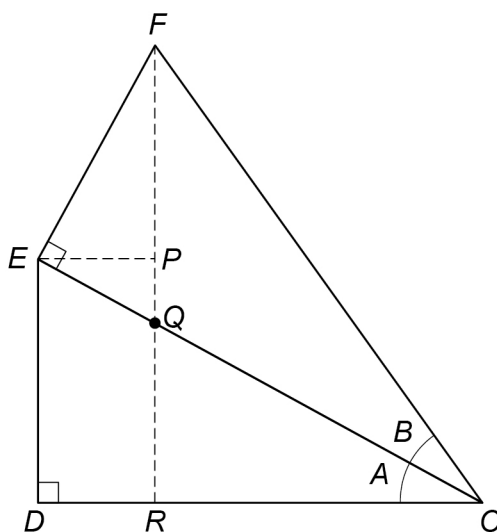
Turn over ▶



14

Some students are trying to prove an identity for  $\sin(A + B)$ .

They start by drawing two right-angled triangles  $ODE$  and  $OEF$ , as shown.



The students' incomplete proof continues,

Let angle  $DOE = A$  and angle  $EOF = B$ .

In triangle  $OFR$ ,

Line 1       $\sin(A + B) = \frac{RF}{OF}$

Line 2                       $= \frac{RP + PF}{OF}$

Line 3                       $= \frac{DE}{OF} + \frac{PF}{OF}$  since  $DE = RP$

Line 4                       $= \frac{DE}{\dots} \times \frac{\dots}{OF} + \frac{PF}{EF} \times \frac{EF}{OF}$

Line 5                       $= \dots + \cos A \sin B$

14 (a) Explain why  $\frac{PF}{EF} \times \frac{EF}{OF}$  in Line 4 leads to  $\cos A \sin B$  in Line 5

[2 marks]

---



---



---



---



---



---

**14 (b)** Complete Line 4 and Line 5 to prove the identity

Line 4  $= \frac{DE}{\dots} \times \frac{\dots}{OF} + \frac{PF}{EF} \times \frac{EF}{OF}$

Line 5  $= \dots + \cos A \sin B$   
**[1 mark]**

**14 (c)** Explain why the argument used in part (a) only proves the identity when  $A$  and  $B$  are acute angles.

**[1 mark]**

---



---



---

**14 (d)** Another student claims that by replacing  $B$  with  $-B$  in the identity for  $\sin(A + B)$  it is possible to find an identity for  $\sin(A - B)$ .

Assuming the identity for  $\sin(A + B)$  is correct for all values of  $A$  and  $B$ , prove a similar result for  $\sin(A - B)$ .

**[3 marks]**

---



---



---



---



---



---



---



---



---



---

Turn over ►



**15** A curve has equation  $y = x^3 - 48x$

The point  $A$  on the curve has  $x$  coordinate  $-4$

The point  $B$  on the curve has  $x$  coordinate  $-4 + h$

**15 (a)** Show that the gradient of the line  $AB$  is  $h^2 - 12h$

**[4 marks]**

---

---

---

---

---

---

---

---

---

---

---

---

---

---

---

---

---

---

---

---

---

---

---

---

**15 (b)** Explain how the result of part **(a)** can be used to show that  $A$  is a stationary point on the curve.

**[2 marks]**

---

---

---

---

---

---

---

---

---

---

**END OF QUESTIONS**





**There are no questions printed on this page**

*Do not write  
outside the  
box*

**DO NOT WRITE ON THIS PAGE  
ANSWER IN THE SPACES PROVIDED**



**There are no questions printed on this page**

*Do not write  
outside the  
box*

**DO NOT WRITE ON THIS PAGE  
ANSWER IN THE SPACES PROVIDED**



**There are no questions printed on this page**

*Do not write  
outside the  
box*

**DO NOT WRITE ON THIS PAGE  
ANSWER IN THE SPACES PROVIDED**



**There are no questions printed on this page**

*Do not write  
outside the  
box*

**DO NOT WRITE ON THIS PAGE  
ANSWER IN THE SPACES PROVIDED**

