

23 (a) A student looked at slides of different tissues under a light microscope.

The four viewed images are labelled **W**, **X**, **Y** and **Z** in Fig. 23.1, **on the insert**.

Identify tissues **W**, **X** and **Y**.

W

X

Y

[3]

(b) The student wrote the following summary about the control of heart rate.

When the heart rate is too low the level of carboxylic acid in the blood becomes higher than normal. The vagus nerve sends action potentials to the AVN to increase the contraction rate of the heart muscle. The baroreceptors in the walls of the blood vessels then detect that the pH of the blood is normal, so heart rate can return to resting.

The endocrine system can also change heart rate. Release of the hormone adrenaline from the adrenal medulla causes the smooth muscle of the heart to contract more frequently.

Identify **and** correct any biological errors in the student's summary.

.....

.....

.....

.....

.....

.....

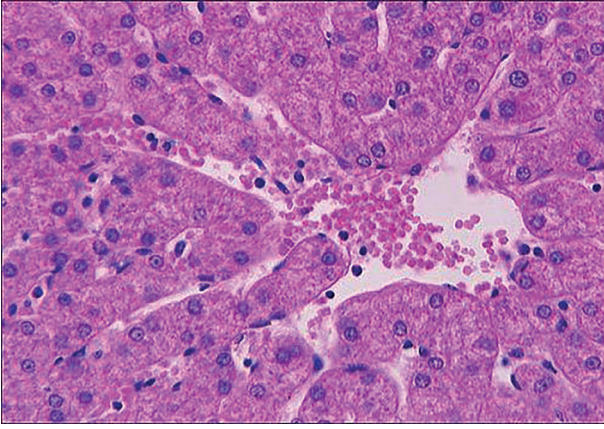
.....

.....

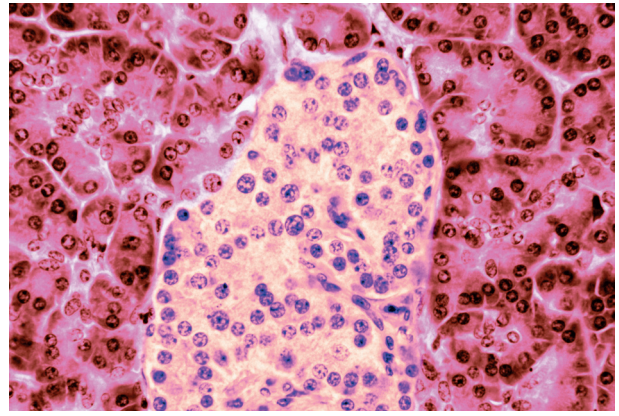
.....

.....

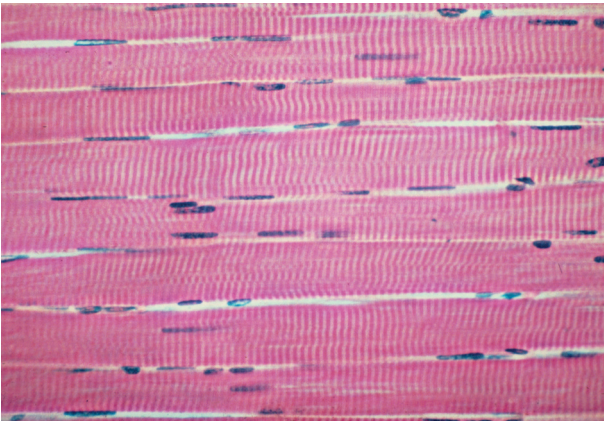
[4]



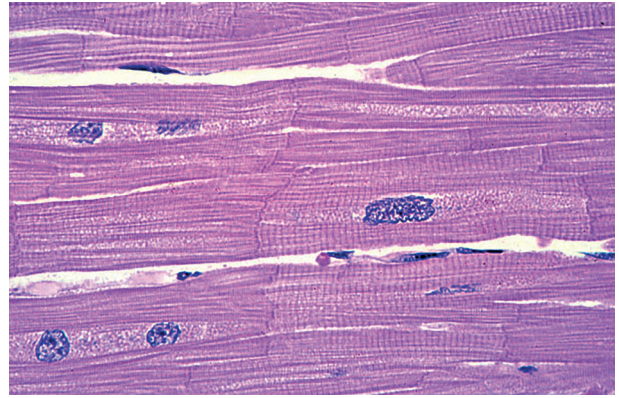
W



X



Y



Z

Fig. 23.1

OCR

Oxford Cambridge and RSA

Copyright Information

OCR is committed to seeking permission to reproduce all third-party content that it uses in its assessment materials. OCR has attempted to identify and contact all copyright holders whose work is used in this paper. To avoid the issue of disclosure of answer-related information to candidates, all copyright acknowledgements are reproduced in the OCR Copyright Acknowledgements Booklet. This is produced for each series of examinations and is freely available to download from our public website (www.ocr.org.uk) after the live examination series.

If OCR has unwittingly failed to correctly acknowledge or clear any third-party content in this assessment material, OCR will be happy to correct its mistake at the earliest possible opportunity.

For queries or further information please contact the Copyright Team, First Floor, 9 Hills Road, Cambridge CB2 1GE.

OCR is part of the Cambridge Assessment Group; Cambridge Assessment is the brand name of University of Cambridge Local Examinations Syndicate (UCLES), which is itself a department of the University of Cambridge.

(c) Reflex actions are rapid responses that protect the body from harm.

The Moro reflex is found in babies up to five months of age, and occurs when the baby feels its head is suddenly no longer supported. The Moro reflex is made up of the following responses:

- The baby spreads out its arms then brings them together rapidly.
- The baby cries.

(i) Suggest how the Moro reflex helps to prevent harm to a newborn baby.

.....
.....
.....
.....
..... [2]

(ii) The Moro reflex gradually disappears and usually stops completely after babies reach nine months. Other reflexes develop as children grow older.

Describe a reflex response a 3-year-old child would make to an object moving towards their eyes **and** explain the advantage of this response.

.....
.....
.....
.....
.....
.....
..... [3]

END OF QUESTION PAPER